

**CHABRIS**  
**Année 2009/2010**

**LES AIRES**

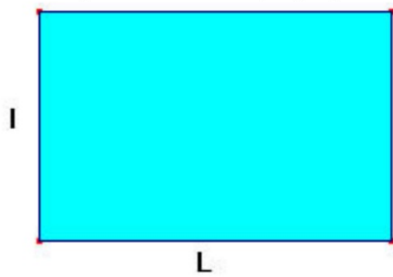
Objectif :

Retrouver les  
formules des aires  
des figures planes  
usuelles

## **Consigne :**

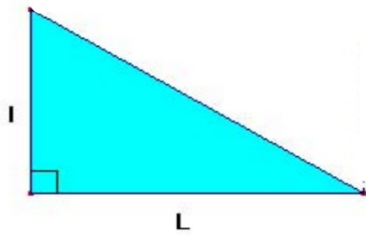
En observant les figures  
et en procédant à un découpage  
judicieux, retrouvez les aires de celles-ci.

(sans découpage)

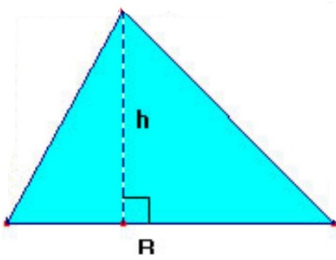


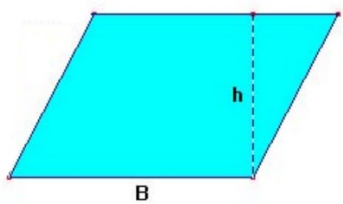
le rectangle :

Le triangle rectangle :

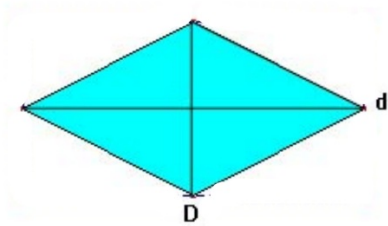
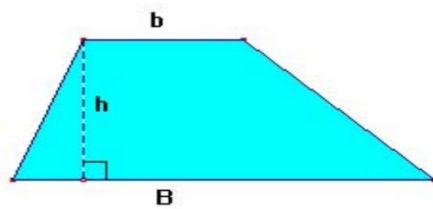


le triangle quelconque :

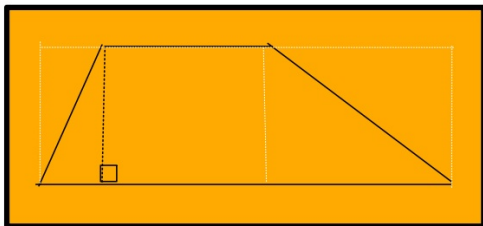




le parallélogramme :



le losange :



le trapèze :

